

DR. VIRENDRA SWARUP EDUCATION CUNNAO

CLASS – 1

SUMMER HOLIDAY HOMEWORK

SESSION - 2025 – 2026

NOTE –

*** Summer holidays will begin from Wednesday i.e.21.05.25.**

*** School will reopen on Wednesday i.e.02.07.25.**




Holidays are not just about the destination,
They are about the journey
Of discovering new experiences and
Embracing the beauty of the world.

GENERAL INSTRUCTIONS:

- *All the work should be done in worksheet itself.
- *Mention the name and date on each worksheet.
- *All the work of different subjects should be handed over to
Respective teachers when the school re-opens.
- *Time to Write - Do page no. 21 to 30
- *Mental Mathematics workbook- Do page no. 10, 30, 31, 32, 45

***"Reading is important because if you can read,
you can learn anything about everything and
everything about anything"***



We suggest you to read the stories from your book **LITTLE READER**

ENGLISH – WORKSHEET

CLASS – 1 SEC. _____

DATE - _____

NAME- _____

ROLL NO. _____

Q.1.Fill in the blanks with –

is

are

am

- 1) I _____ going to school.
- 2) Rashi and Disha _____ playing hide and seek .
- 3) The tree _____ full of apples.
- 4) You _____ my best friend.
- 5) I _____ your new neighbour.

Q.2.Fill in the blanks with correct form of plural given in the bracket.

- 1) Jerry ate _____ for the lunch. (sandwich)
- 2) I got many _____ on my birthday. (wish)
- 3) The forest is full of _____. (tree)
- 4) My brother gifted me _____. (watch)
- 5) I saw three _____ on the road. (bus)

Q.3.Look at all the things in the picture and write the names in correct column .

A – An



a	an
_____	_____
_____	_____
_____	_____
_____	_____
_____	_____

Q.4.Fill in the blanks with in, on, under using the given pictures.



1) The book is _____ the table.

2) The mouse is _____ the box.



3) The dog and the cat are _____ the table.



4) The cat is _____ the box.



5) The seal is _____ the ball.



6) The toy is _____ the bed.




Q.5.Circle the word that rhymes with the given picture.

1)  man fun cot pot

2)  dot jug fin mat

3)  van pen run lip

4)  cap hug pet fan

5)  sad fig pop net

SOCIAL STUDIES - WORKSHEET

CLASS- 1 SEC. _____

DATE - _____

NAME - _____

ROLL NO. _____

Q.6. Identify the type of family and write in the given space.



Q.2. Circle the odd one out.

- | | | | |
|-----------------|--------------|------------|--------------|
| 1) Father | mother | big family | sister |
| 2) Joint family | Small family | surname | Big family |
| 3) Grand father | Grand mother | brother | Small family |
| 4) Uncle | Aunt | Friend | Cousin |

PARTS OF THE HOUSE

1. Complete the parts of the house:

GARDEN

ROOF

BATHROOM

GARAGE

BEDROOM

LIVING ROOM

HALL

KITCHEN



2. Write the name of each part of the house:

Dr

2.

1.

4.

3.

6.

5.

8.

7.

डॉ. वीरेन्द्र स्वरूप एजुकेशन सेंटर, उन्नाव
द्विध्मकालीन अवकाश कार्य - (2025-24)

कक्षा - एक



नाम - _____

अनुक्रमांक - _____

प्रश्न-1 आ (i) की मात्रा वाले दस शब्द लिखिए-

- | | | |
|----------|---------|---------|
| 1. | 2. | 3. |
| 4. | 5. | 6. |
| 7. | 8. | 9. |
| 10. | | |

प्रश्न-2 आ (i) की मात्रा वाले शब्दों पर गोला ○ बनाइए-

- | | | |
|---------|---------|----------|
| 1. बालक | 2. घर | 3. कबूतर |
| 4. फल | 5. राजा | 6. ऐनक |
| 7. मामा | 8. सूरज | 9. आम |
| 10. औरत | | |

प्रश्न-3 निम्न अक्षरों को जोड़कर शब्द बनाइए-

- | | | |
|------------------------------|---|-------|
| 1. ब + i + ल + क | = | |
| 2. ग + i + ज + र | = | |
| 3. अ + न + i + र | = | |
| 4. र + i + ज + i | = | |
| 5. ट + म + i + ट + र | = | |
| 6. प + i + ठ + श + i + ल + i | = | |

प्रश्न-4 इ (ि) और ई (ी) की मात्रा वाले पाँच-पाँच शब्द लिखिए-

इ (ि)

1.
2.
3.
4.
5.

ई (ी)

1.
2.
3.
4.
5.

प्रश्न-5 इ (ि) और ई (ी) की मात्रा वाले शब्दों पर गोला ○ बनाइए-

- | | | | |
|----------|---------|---------|----------|
| 1. बादल | 2. धनी | 3. मटर | 4. मिठाई |
| 5. मुरली | 6. मौसी | 7. मछली | 8. सियार |
| 9. बगुला | 10. घर | 11. बिल | 12. तीर |

प्रश्न-6 सही मात्रा लगाकर शब्द पूरे करिए-

- | | | | |
|---------|----------|----------|----------|
| 1. हाथ_ | 2. _ततल_ | 3. मछल_ | 4. _सतार |
| 5. _हरन | 6. बकर_ | 7. ग_रमा | 8. प_पल |

प्रश्न-7 वर्णों को सही क्रम में लिखकर शब्द बनाइए-

- | | |
|--------------------|--------------------|
| 1. ती जा ब = | 2. फ रा जि = |
| 3. हा क नी = | 4. न हि र = |
| 5. ली छ म = | 6. र या सि = |

NAME - _____

DATE- _____


CLASS: 1 SEC. _____

ROLL NO. _____

Q1: Colour the food items which are healthy to eat:



Q2: Colour the items you use to keep yourself clean:



Q3. Write the name of the following products you use to keep yourself clean:

1. Soap:

2. Tooth paste

3. Tooth brush

4. Shampoo

5. Hair oil

Q4: Prepare a meal chart for a week on a coloured sheet of A4 size writing all the food items you eat during your lunch, breakfast , dinner and snacks.



NAME- _____

DATE- _____

CLASS:1 SEC. _____

ROLL NO. _____

Question 1

Skip Counting

a) ***Skip the count by 2 and fill in the boxes:-***

2		6		10		14			20
22				30				38	
	44					54			60
		66			72			78	
	84						96		100

b) ***Skip the count by 5 and fill in the boxes:-***


5			20				40	45	50
		65				85			100
	110			125			140		
155			170		180				200

c) ***Skip the count by 10 and fill in the boxes:-***

10		30				70		90	
	120			150			180		200

Question 2

Fill in the colours according to the given numbers:- (For example- $8+2=10$, colour dark green)



Follow the instructions given below and make the caterpillar colourful!

1, 11 – Brown

2, 12 – Red

3, 13 – Purple

4, 14 – Green

5, 15 – Black

6, 16 – Pink

7, 17 – Blue

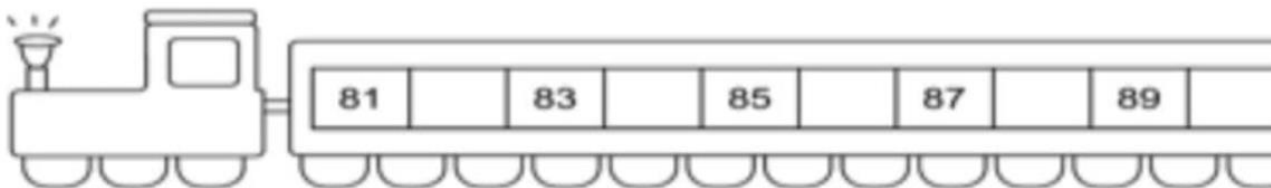
8, 18 – Yellow

9, 19 – Orange

10, 20 – Dark Green

Question 3

Complete the number series and fill in the blanks .Make the trains colourful;



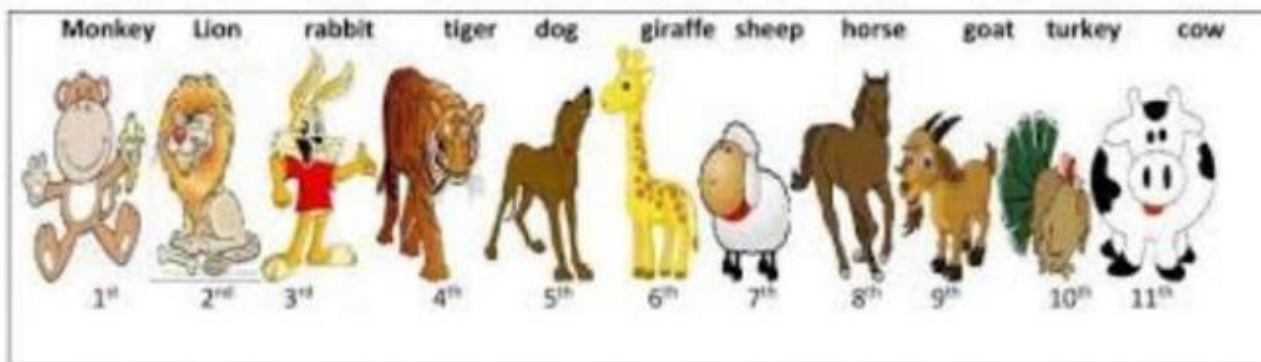
Question 4

Find the missing number:- (Addition)

$3 + \bigcirc = 8$	$8 + \bigcirc = 10$
$\bigcirc + 2 = 9$	$\bigcirc + 3 = 6$
$5 + \bigcirc = 6$	$2 + \bigcirc = 4$
$1 + \bigcirc = 8$	$5 + \bigcirc = 9$
$\bigcirc + 2 = 10$	$\bigcirc + 4 = 4$

Question 5

Match the ordinal numbers with the animals from the pictures given.



Which animal is the:

1. Fourth – _____
2. Seventh – _____
3. Second – _____
4. Sixth – _____
5. Ninth – _____
6. First – _____

7. Third – _____
8. Tenth – _____
9. Eighth – _____
10. Fifth – _____

COMPUTER HOLIDAY HOMEWORK



NOTE - Paste the images of 8 different places on chart paper where computers are used.

HAPPY
holidays

