




DR. VIRENDRA SWARUP EDUCATION CENTRE , UNNAO
SUMMER VACATION HOMEWORK (2025-26)

CLASS-V

“To be ready for tomorrow’s opportunities, do your homework today. Learn, refine your skills and focus on growth ”.

INSTRUCTIONS TO BE FOLLOWED-

- Holiday Homework of each subject is to be done in the respective subject notebooks.
- Do it on regular basis with date.
- The holiday homework must be done in a neat and very presentable manner.
- Questions must be done in a correct sequence.
- Enrich your vocabulary by learning the vocabulary words from Hindi and English text books.
- Subject teachers have further imparted specific instructions for the subjects. Before attempting the question, you must read them thoroughly.



Subject – ENGLISH

1) Read the following stories from the Short Reads Book –

1. The five children and It
2. Mr. Dean goes missing
3. Money

Now, choose a character from a story you like the most. Write 5 creative questions you would like to ask them, and imagine their answers too.

NOTE : THIS WORK IS TO BE DONE IN A COLOURED A4 SHEET.

HOLIDAY HOMEWORK WORKSHEET

Q.1 Complete the passage by filling in the blanks with correct options

from brackets : (My/Mine) sister Juhi was six years old. (His/Her) friends would often come to (ours/our) house to play with her. The (small/high) backyard we had would become the playground for Juhi and her friends. (Dull/Colourful) toys would litter the place (twelve/five) evenings a week.

(Lot/Some) flower bushes grew near the gate and the kids would pretend (this/these) gate to be the door of heavens. I would sit and watch Juhi and her friends play. The (sweet/bitter) memories of (that/ those) days shall never leave me.

Q.2 Rewrite these sentences by replacing the words in bold with suitable adjectives from the box. Make appropriate changes in the sentences if required :

|| Dirty, Witty, Colourful, Happy, Interesting, Uncomfortable, Fearless ||

1. Sonalika likes to read books that are **able to capture her interest**.
-

2. After the football match, Rohan's shoes were **covered with dirt**.

3. After the rains, there appeared a rainbow **full of colour** in the sky.

4. When Varun saw his result, he was **full of happiness**.

5. Abhimanyu is a man **without fear**.

6. Saransh is intelligent and **full of wit**.

7. Farooq's bus journey to Leh was **without any comfort**.

Q.3. Three words in each group have similar meanings. Cross the one that is different :

- | | | | |
|-----------|----------|-------------|-----------|
| 1.correct | right | appropriate | accurate |
| 2.yell | whisper | shout | scream |
| 3.angry | furious | cross | dejected |
| 4.smile | laugh | giggle | grin |
| 5.strange | peculiar | unusual | wonderful |

Q.4 Make sentences according to the directions given in brackets :

1. generous (Make a sentence with its noun form.)
-

2. failure (Make a sentence with its verb form.)
-

3. enthusiasm (Make a sentence with its adjective form.)
-

4. fascinate (Make a sentence with its noun form.)
-

Q.5 Add apostrophes (') wherever required in the given sentences :

1. The teachers table was painted red, which annoyed her very much.
2. My fathers office is near my mothers shop.
3. The womens dresses were very expensive even after the discount.
4. Anil is packing Anu, Reema and Sanjays lunch.
5. Three boys bikes were parked in the driveway.

6. Where is Harjinders pencil box?
7. I put on Prajiths hat by mistake.

Q.6 Choose the appropriate conjunctions for the following sentences ; 1. The weather in Texas is hot, ____ it's known to get cold there as well.

2. ____ it rains on Sunday, I will not be able to drive.
3. I like dogs a lot ____ they're so friendly.
4. Amber doesn't have a ride, ____ Pearl will have to take her home.
5. Neither my mother ____ my father will be able to attend the party on Sunday.
6. Jeanne can read lips ____ she's looking right at you.
7. Either stop talking to your friends _____ move your seat.
8. We won't know how well Dad is doing _____ his lab tests come back.

Q.7 Correct the mistakes in the use of collective nouns in the following sentences and rewrite them :

1. A pride of spectators gathered around the winner.
1. _____
2. Our submarine followed a shoal of geese.
2. _____
3. Did you find a bouquet of keys on this table?
3. _____
4. The ship had a team of singers aboard.
4. _____

Q.8 Rewrite the sentences replacing the nouns in bold with nouns of opposite gender :

1. The **duke** had a beautiful white **horse**.
1. _____
2. There are five **men** living in the hostel at present.
2. _____
3. The **king** and the **prince** are walking in the garden.
3. _____
4. My **father** has two **nieces** who live in Bangkok.
4. _____

विषय –हिंदी

ग्रीष्म कालीन –गृह कार्य – २०२५ -२६

कक्षा ---पाँच

विषय --- हिन्दी

- १- राष्ट्रीय पशु बाघ का चित्र चार्ट पेपर में चिपका कर उसके बारे में एक लेख लिखिए और प्रकृति से प्राप्त होने वाली पाँच वस्तुओं के चित्र लगाकर उनसे क्या – क्या लाभ हैं अपने शब्दों में लिखिए।
- २- ०१ जून २०२५ से ३० जून २०२५ तक प्रतिदिन एक पेज सुलेख सुंदर – सुंदर लिखें। (६० पेज की काँपी में) व व्याकरण पुष्प में पढ़ाए गए सभी पाठों का अभ्यास कार्य पूर्ण करिए।

Subject – Mathematics

Maths Project:

1) Geometry City Planning

Create a city plan using geometric shapes (e.g., squares, circles, triangles) to design buildings, roads, and parks.



2) Write about any two Indian mathematicians. Paste their photo in a4 sheet and write few lines about them.

Maths Worksheet

Q1. Write the Hindu Arabic numerals:- a) DXXII _____ b) XC _____

Q2. Round off 83,622 to nearest 10,000. _____

Q3. If + equals - and - equals + then find the value of : $19 + 17 - 75 + (8 - 4)$

Q4. Add:- CC + LXX + XLI

Q5. Simplify as per the BODMAS:- $7,66,246 - 54,312 + 97,500 - 964$

Q6. Find the value of $P + Q - R$ if $P = 55,445$; $Q = 99,556$ and $R = 11,660$.

Q7. Arrange the following numbers in the ascending order:-

5,95,967 ; 5,72,697 ; 6,58,932 ; 6,58,392.

Also write the expanded form of the smallest number from the numbers given above.

Ascending Order _____

Expanded form _____

Q8. Complete the following table:-

Number $\div 1000$	Number (N)	Number $\times 100$	Number $\times 10$
a) Q = _____ R = _____	12,344		
b) Q = _____ R = _____			4,56,860

Q9. Form the smallest 6-digit number by using the digits:- 7 , 2 , 9 , 3 , 1 , 0

Write the number names in both the systems (India place value system and International place value system) of the smallest number formed from the digits given above.

Q10. 10,223 Apple's were packed in box to be sold in the market.If each box contain 36 apples, how many boxes were there?

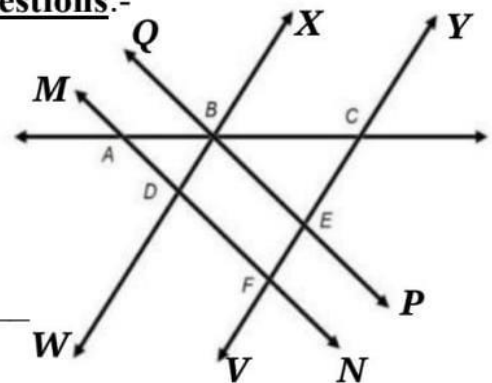
Q11. Arrange the sequence given below in descending order. 1, 2, 6, 5, 4, 3, 9, 8, 7

Answer the following questions on the basis of descending order:-

- a) Which of the following is the sum of middle and last digit? _____
- b) Find the difference of 1st and last digit _____

Q12. **From the given figure,answer the following questions:-**

- a) Name the fixed point in the following :
Ray EP _____ ; Line WX _____
- b) Represent the following using symbolically:-
Line Segment AF _____ ; Ray CY _____
- c) Name a pair of parallel line. _____



SUBJECT-SCIENCE


1) Best out of Waste

Create a science – related model using best out of waste materials available at home. Your model should demonstrate a scientific concept such as water cycle, wind mill, simple machine(like a pulley or lever), solar cooker or any eco friendly innovation. Be creative and use materials like old bottles, cardboard , newspaper, straw , plastic containers, or any

recyclable items. Write on an A4 sheet explaining scientific concept of your model.

SUBJECT- SOCIAL SCIENCE

- 1) Make a scrapbook of 10 inventions and discoveries like antibiotics, MRI, microscope, ultrasound, etc., which help doctors diagnose a disease. Stick picture of it, write the year of invention, name of inventor, and it's uses.



SUBJECT-COMPUTER

- 1) Write the information in brief about the devices developed between 1940 to 1971. Paste the image as per requirement. Do it on A-4 sheet.



Happy
Holidays