



DR. VIRENDR SWARUP EDUCATION CENTRE, UNNAO

CLASS - 2

WINTER HOLIDAY HOMEWORK 2024 – 2025



NOTE –

- Winter holidays will begin from Monday ie. 30.12.2024
- School will reopen on Thursday ie. 16.1.2025



Holidays are not just about the destination, they are about the journey
Of discovering new experiences and embracing the beauty of the world.

GENERAL INSTRUCTIONS:

- All the work should be done in worksheet itself.
- Mention the name and date on each worksheet.
- All the work of different subjects should be handed over to respective teachers

When the school reopens.

- Time to Write – Do page no. 51,52,53,54,55
- Mental Maths – Do page no. 81,82,83,86,88



CLASS – 2 SEC. _____

DATE- _____

NAME - _____

Q.1. Make simple sentences using pronouns given in the box.

_____ You	We
_____ He / She	It
They	I

- 1) _____
- 2) _____
- 3) _____
- 4) _____
- 5) _____
- 6) _____

Q.2. Some phrases in the following story are underlined. Rewrite these phrases using an apostrophe.

Sudama was the friend of Lord Krishna. They stayed together at the house of their guru and got education. When they grew up, Sudama remained poor but Lord Krishna became the king of Dwarka.

One day the wife of Sudama requested him to go to Lord Krishna and ask for help. He had no present to give to his friend. But his wife gave him a small bundle of rice.

Lord Krishna welcomed his old friend warmly. Sudama was afraid to offer him the rice. But Lord Krishna accepted the gift sent by the wife of his friend with great pleasure.


- 1) _____
- 2) _____
- 3) _____
- 4) _____
- 5) _____
- 6) _____

Q.3. Look at the given picture and write a paragraph on it.



Q.4. ***“Reading is important because if you can read, you can learn anything about everything and everything about anything”***

We recommend you to read any of the following stories. Pick out nouns, pronouns, verbs, adjectives and conjunctions from the story and write them separately in the given box.




CLASS - 2 SEC. _____

DATE - _____

NAME- _____

Q.1. Look at the picture and answer the following questions.



1) Name the landform shown in the picture and describe it.

2) What kind of plants usually grow here?

3) Name the animal found in this area.

4) Why this animal known as 'the ship of the desert'. Give reason.

5) Do you think life in this area would be easy? Why? Why not? Give reason.

Q.2. Which of the landform would you like to visit? Why? Give reason.

DR. VIRENDRA SWARUP EDUCATION CENTRE, UNNAO

COMPUTER HOLIDAY HOMEWORK 2024-2025



CLASS - 2 SEC. _____

DATE- _____

NAME- _____

Q. Write the steps to start your computer and to shut down your computer.

शीतकालीन अवकाश - गृहकार्य

नाम _____ कक्षा - दो (२०२४-२५)

1. नीचे दिए गए शब्दों के विलोम शब्द से मिलान कीजिए ।

- | | |
|---------|-------|
| 1. ऊपर | छोटा |
| 2. सोना | बाहर |
| 3. बड़ा | जागना |
| 4. भीतर | नीचे |

2. नीचे दिए गए शब्दों से संज्ञा शब्द और सर्वनाम शब्द अलग कर लिखिए।

वृक्ष, उनको, उसे, लड़की, विद्यालय, कुछ, इसका, माता, वहाँ, पतंग, दादी, मुझे

संज्ञा						
सर्वनाम						

3. नीचे दिए गए विशेष्य शब्दों के लिए उपर्युक्त विशेषण शब्द लिखिए ।

(रंग-बिरंगी, लम्बी, हरा-भरा, रेशमी, प्यारी, स्वादिष्ट, बड़ा, चौथी)

- | | |
|----------------|-----------------|
| 1. _____ सड़क | 5. _____ कुर्ता |
| 2. _____ इमारत | 6. _____ बालिका |
| 3. _____ तितली | 7. _____ मिठाई |
| 4. _____ कक्षा | 8. _____ जंगल |

4. दिए गए वाक्यों में उचित क्रिया शब्द लिखकर वाक्य पूरा कीजिए ।

1. मैं सुबह _____ जाता हूँ। (मीठा / खेलने)
2. हम चौथी कक्षा में _____ हैं। (पढ़ते / स्कूल)
3. रीना बहुत अच्छा _____ है। (बाजा / गाती)
4. बगीचे में अनेक रंग-बिरंगे फूल _____ हुए हैं। (खिले / दौड़ना)
5. माली पौधों में पानी _____ रहा है। (खेल / डाल)
6. माँ खाना _____ रही है। (बना / लिख)
7. आसमान में पक्षियाँ _____ रही हैं। (उड़ / पढ़)

CLASS-2 SEC. _____

DATE- _____

NAME- _____

Number of butterflies =

Number of wings in each butterfly =


Total number of wings = + + =

or 3 groups of is

times 2 is 6

3 twos are [LearnInsta.com](https://www.learninsta.com)

× =



Number of octopuses =

Number of legs in each octopus =

Total number of legs = + =

2 groups of is

2 times is 16

2 eights are

× =



Number of lines =

Number of soldiers in each line =


Total number of soldiers = + + + =


times is 40


4 tens are

× =





 $4 \times 3 = \square \times 6$


 $5 \times \square = 25 \div 5$


 $24 \div 6 = 12 \div \square$


 $\square \times 6 = 3 \times 8$


 $3 \times 3 = \square \times 4$

 $4 \times \square = 2 \times 10$


 $27 \div 3 = 36 \div \square$


 $\square \div 6 = 40 \div 8$


 $4 \times 4 = \square \times 2$


 $28 \div \square = 2 \times 2$





 $42 \div 6 = 35 \div \square$


 $\square \div 6 = 18 \div 3$


 $7 \times 3 = \square \times 3$


 $9 \times \square = 3 \times 6$

 $12 \div 6 = 16 \div \square$

 $\square \div 4 = 48 \div 6$

 $4 \times 6 = \square \times 3$

 $2 \times \square = 12 \div 2$

 $4 \times 2 = 32 \div \square$

 $\square \div 5 = 35 \div 7$

SCIENCE HOLIDAY HOMEWORK 2024-2025

CLASS-2 SEC. _____

DATE- _____

NAME- _____

Write freshwater or saltwater for each.



lake



ocean



iceberg



river



glacier



puddle



most of Earth's water



water we can drink

A. Tick (✓) the things which need air to live.



B. Fill in the blanks.

- A gentle wind is called _____ (breeze/gale)
- A fast blowing wind with rain is called _____ (horn/storm)
- Human beings need air to _____ (live/die)
- Air _____ things. (wind/moves)
- Air helps us to fly an _____ (car/aeroplane)



Happy
holidays